


ANSWER, FIND, AND SHADE


Solve the time word problems.

12:00	12:05	4:15	10:30	8:15	12:15
12:05	10:10	4:45	8:45	4:35	9:10
10:50	6:30	5:30	10:50	4:30	9:30
10:10	5:30	5:00	5:00	8:45	4:15
5:00	4:45	10:50	9:45	9:30	5:30
11:25	10:10	5:00	9:45	5:25	10:50
12:05	5:30	4:45	10:10	5:30	5:00
6:30	4:45	10:10	4:00	12:15	6:30
5:30	5:00	10:50	8:15	10:30	10:10
11:25	4:45	9:45	4:30	5:25	4:45



Hank arrived at the airport 4 hours before his flight was due to leave. His flight was at 12:45. What time did Hank arrive?

8:45



Diane went to bed at half past 9 and slept for 8 hours. What time did she get out of bed?

5:30



Mrs. Park wants to bake cookies for the school's yearly fund raiser. If they take 40 minutes to bake and she starts at 9:30, what time will they be done?

9:10



If a man needs to be at work at 8:30 and it takes 2 hours to get there. What is the latest time he can leave?

6:30



Doug takes three hours to wash his parents' cars. If he starts at quarter past one, what time will he finish?

4:15




Stan walked 4 km. He left at 9:20 and walked for one and a half hours. What time did he return home?

10:50




Victoria started reading at 8:15. If she reads 10 pages and each page takes 9 minutes, what time did she finish?

9:45




Frank took the train to Geneva. The trip lasted 5 hours and 15 minutes and he arrived at 5:20. What time did he leave?

12:05




Mr. Jones starts work at 8 o'clock and works for 9 hours. What time does he get off?

5:00



The time in New York is 3 hours later than that in California. If it is 2:25 in New York, what time is it in California?

11:25



The South High Football Team plays Madison on Friday night. They plan on leaving for the game at 3:05 and it takes 100 minutes to get there. What time will they arrive?

4:45