


# ANSWER, FIND, AND SHADE

Simplify each expression by combining like terms.

$-2y + 8$	$-8$	$7y$	$2y + 3x$	$4y$	$5x$	$y + 8$
$6y + 8$	$+6$	$7x$			$4x + 3y$	$12y - 6$
$5x$					$-2x + 6y$	$3x - y$
$4y$					$-8$	$6y + 8$
$x - 5$	$10y$		$+9$		$6x$	$-2x + 6y$
$3x - y$	$2x + 10$		$+6$		$5$	$y + 8$
$5$	$-2x + 6y$	$7x$			$-8$	$7x - 3y$
$-2y + 8$	$4y$				$+6$	
$-3x - y$	$10y$				$+7$	
$4y$	$-8$	$9y - 6$	$5x$	$-2y + 8$	$x - 5$	$7x$
	$+7$	$7x$				$+9$

# ANSWERS



$$3 + y - 1 + 3y$$

$$4y + 2$$



$$5x + 2y - 2x + 3y$$

$$3x + 5y$$



$$9y - 3(y - 2)$$

$$6y + 6$$




$$6(x + 4) - 4x - 15$$

$$2x + 9$$



$$4x - 5y - x - 3x$$

$$-5y$$



$$5(2y - 6) + 15$$

$$10y - 15$$



$$2y + 4 - y + 3$$

$$y + 7$$



$$x + 4y + 2x - 3y$$

$$3x + y$$




$$2(2y - 5) - 2(2y + x)$$

$$-2x - 10$$




$$4y - 2(y + 4)$$

$$2y - 8$$




$$4y - 3x - y + x$$

$$-2x + 3y$$




$$x - (y + 5x - 2y)$$

$$-4x + y$$



$$3x + 2(2x - 3y)$$

$$7x - 6y$$



$$5y + 2(4 - 2y) - 5 - y$$

$$3$$



$$4 + 3(y - 3)$$

$$3y - 5$$